

Monday 13th July

Year 2 Home-schooling! This is your last week of home schooling before the Summer holidays!

Welcome back to another week of home learning! Remember that doing your best is the main thing. Just try you're your best to do what you can 😊

Please email 2hd@boxgrove.greenwich.sch.uk or 2mb@boxgrove.greenwich.sch.uk if you would like to ask or show anything. Keep working hard and having fun and we hope we can see you soon!

Miss Dixon and Miss Burke 😊

Thought of the day



Reading

For reading this week, please read for 15 minutes every day. You can then draw a picture or write a sentence about what has happened.



Handwriting

Look

Trace

Copy

reading

reading

shopping

shopping

playing

playing

Writing

Write a sentence for each of these words e.g. I love reading books by Roald Dahl.

Look

Trace

Copy

reading

reading

shopping

shopping

playing

playing

Maths

2 Times Table

Questions:

a. $1 \times 2 =$ _____ b. $2 \times 2 =$ _____ c. $3 \times 2 =$ _____

d. $4 \times 2 =$ _____ e. $5 \times 2 =$ _____ f. $6 \times 2 =$ _____

g. $7 \times 2 =$ _____ h. $8 \times 2 =$ _____ i. $9 \times 2 =$ _____

j. $10 \times 2 =$ _____ k. $11 \times 2 =$ _____ l. $12 \times 2 =$ _____

Count in 2s and colour in the grid:

1	2	3	4	5
6	7	8	9	10
11	12	13	14	15
16	17	18	19	20
21	22	23	24	25

How many ears are there?

a.  _____ x _____ = _____

b.  _____ x _____ = _____

c.  _____ x _____ = _____

<https://www.youtube.com/watch?v=GvTcpfSnOMQ>

Well done for completing your work today! Remember to use any of the educational websites or do some drawing and creating!



Home Learning Websites

Website	Link	Log In Information
Twinkl	https://www.twinkl.co.uk/offer	You will need to set up an account online. Use the offer code 'UKTWINKLHELPS' when setting up for a one month free membership.
Times Tables Rockstars	https://trockstars.com/	Click 'log in'. You will then need to put in the school name and then use the details that you received on a letter from your class teacher to log in.
BBC Bitesize	https://www.bbc.co.uk/bitesize/primary	No log in details are needed.
Purple Mash	https://www.purplemash.com/sch/boxgrove	Use your personal log in given to you by your teacher.
MyMaths	https://login.mymaths.co.uk/	Use your personal log in given to you by your teacher.
Oxford Owl	https://www.oxfordowl.co.uk/	Create an account online to access eBooks online (these are just like the books we send home for reading records).

<https://www.youtube.com/user/thebodycoach1>

Joe Wicks is streaming a 30-minute 'PE lesson' every morning from 9am. He also has a range of child friendly work outs to keep your children fit.

Tuesday 14th July

Welcome back! Thought of the day...

Keep looking UP...
THERE MAY BE A
RAINBOW
waiting FOR you.

Reading

For reading this week, please read for 15 minutes every day. You can then draw a picture or write a sentence about what has happened.



Handwriting

Look

Trace

Copy

singing

singing

dancing

dancing

flying

flying

Writing

Look

Trace

Copy

singing

singing

dancing

dancing

flying

flying

Write a sentence for each of these words.

Maths

5 Times Table

Questions:

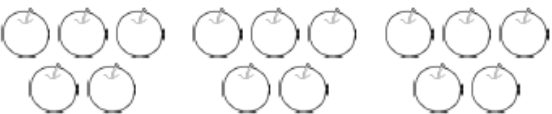
- a. $2 \times 5 =$ _____
- b. $3 \times 5 =$ _____
- c. $4 \times 5 =$ _____
- d. $5 \times 5 =$ _____
- e. $6 \times 5 =$ _____
- f. $7 \times 5 =$ _____

Count in 5s and colour in the grid:

1	2	3	4	5	6	7	8	9	10
11	12	13	14	15	16	17	18	19	20
21	22	23	24	25	26	27	28	29	30
31	32	33	34	35	36	37	38	39	40
41	42	43	44	45	46	47	48	49	50
51	52	53	54	55	56	57	58	59	60
61	62	63	64	65	66	67	68	69	70
71	72	73	74	75	76	77	78	79	80
81	82	83	84	85	86	87	88	89	90
91	92	93	94	95	96	97	98	99	100

<https://www.youtube.com/watch?v=EemjeA2Djjw>

How many of each?

a.  _____ x _____ = _____

b.  _____ x _____ = _____

c.  _____ x _____ = _____

Wednesday 15th July

Welcome back! We hope you are safe and well.
We hope you are ready for some more learning



Thought of the day...



Reading

For reading this week, please read for 15 minutes every day. You can then draw a picture or write a sentence about what has happened.



Handwriting

Look

Trace

Copy

driving

driving

swimming

swimming

diving

diving

Maths

10 Times Table

Questions:

a. $2 \times 10 =$ _____

b. $3 \times 10 =$ _____

c. $4 \times 10 =$ _____

d. $5 \times 10 =$ _____

e. $6 \times 10 =$ _____

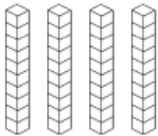
f. $7 \times 10 =$ _____

Count in 10s and colour in the grid:

1	2	3	4	5	6	7	8	9	10
11	12	13	14	15	16	17	18	19	20
21	22	23	24	25	26	27	28	29	30
31	32	33	34	35	36	37	38	39	40
41	42	43	44	45	46	47	48	49	50
51	52	53	54	55	56	57	58	59	60
61	62	63	64	65	66	67	68	69	70
71	72	73	74	75	76	77	78	79	80
81	82	83	84	85	86	87	88	89	90
91	92	93	94	95	96	97	98	99	100

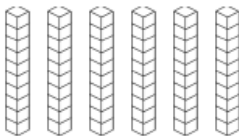
How many of each? There are 10 cubes in each stack.

a.



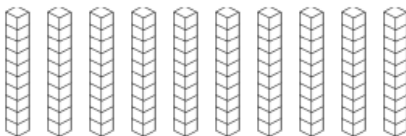
_____ x _____ = _____

b.



_____ x _____ = _____

c.



_____ x _____ = _____

[https://
www.youtube.com/watch?
v=Ftati8iGQcs](https://www.youtube.com/watch?v=Ftati8iGQcs)

That's all for today! Remember to use any of the education websites if you have access to internet.

And remember to keep reading 😊

Work for Thursday and Friday is on a separate document.